

Принцип возможных перемещений (2)

Механизм с идеальными стационарными связями находится в равновесии под действием силы F и моментов M_1, M_2 . Длины звеньев даны в сантиметрах. Стержни, направление которых не указано, считать горизонтальными или вертикальными. Диск касается горизонтальной поверхности без проскальзывания. Найти величину F .

Кирсанов М.Н. **Решебник. Теоретическая механика**/Под ред. А. И. Кириллова.– М.: ФИЗМАТЛИТ, 2008. — 384 с. (с.158.)

Задача 34.1. ||

$M_1 = 141, M_2 = 580, R = 8, OA = 6\sqrt{2},$
 $CD = 8\sqrt{2}, AN = 12, AB = 28, \alpha = 45^\circ.$

Задача 34.2. ||

$M_1 = 13, M_2 = 30, R = 6, OA = 6\sqrt{2},$
 $AB = 6, BN = BC = 6, CD = 12, \alpha = 45^\circ$

Задача 34.3. ||

$M_1 = 38, M_2 = 62, R = 6, OA = 4\sqrt{2},$
 $AK = 9, BK = 3, KN = 6, CD = 3, \alpha = 45^\circ.$

Задача 34.4. ||

$M_1 = 38, M_2 = 62, R = 6, OA = 2\sqrt{2},$
 $AK = 9, BK = 4, KN = 6, CD = 4, \alpha = 45^\circ.$

Задача 34.5. ||

$M_1 = 105, M_2 = 177, R = 4, OA = 2\sqrt{2},$
 $AK = 7, BK = 3, KN = 4, CD = 3, \alpha = 45^\circ.$

Задача 34.6. ||

$M_1 = 19, M_2 = 40, R = 5, OA = 5,$
 $AD = 5\sqrt{2}, BC = 1, \alpha = 45^\circ.$

Задача 34.7. ||

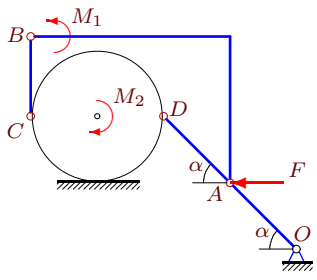
$M_1 = 36, M_2 = 41, R = 7, OA = 7\sqrt{2},$
 $AB = 7, BN = 7, BC = 7\sqrt{2}, CD = 7, \alpha = 45^\circ$

Задача 34.8. ||

$M_1 = 288, M_2 = 146, R = 7, OA = 8,$
 $CD = 14\sqrt{2}, AN = 8, AB = 22, \alpha = 45^\circ.$

Задача 34.9.

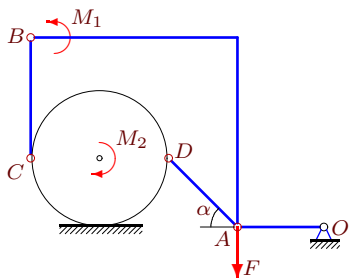
11



$M_1 = 180, M_2 = 183, R = 5, OA = 5\sqrt{2},$
 $AD = 5\sqrt{2}, BC = 6, \alpha = 45^\circ.$

Задача 34.11.

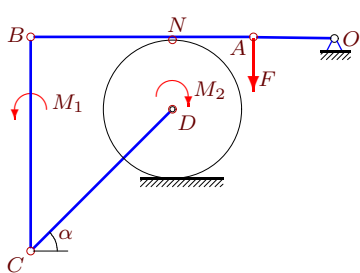
11



$M_1 = 85, M_2 = 125, R = 4, OA = 5,$
 $AD = 4\sqrt{2}, BC = 7, \alpha = 45^\circ.$

Задача 34.13.

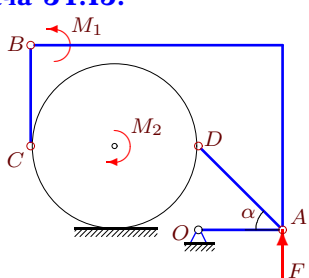
11



$M_1 = 288, M_2 = 146, R = 7, OA = 8,$
 $CD = 14\sqrt{2}, AN = 8, AB = 22, \alpha = 45^\circ.$

Задача 34.15.

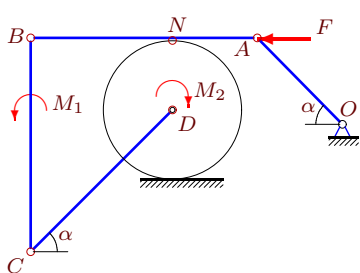
11



$M_1 = M_2 = 39, R = 5, OA = 5,$
 $AD = 5\sqrt{2}, BC = 6, \alpha = 45^\circ.$

Задача 34.17.

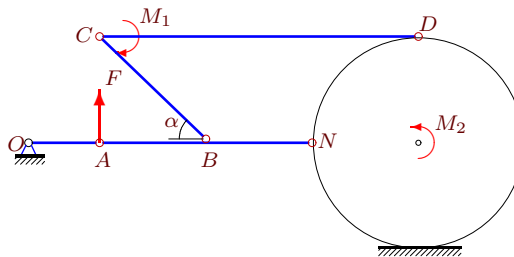
11



$M_1 = 261, M_2 = 187, R = 5, OA = 6\sqrt{2},$
 $CD = 10\sqrt{2}, AN = 6, AB = 16, \alpha = 45^\circ.$

Задача 34.10.

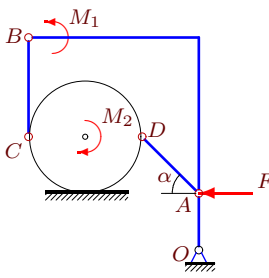
11



$M_1 = 72, M_2 = 181, R = 6, OA = 4,$
 $AB = 6, BN = 6, BC = 6\sqrt{2}, CD = 18, \alpha = 45^\circ$

Задача 34.12.

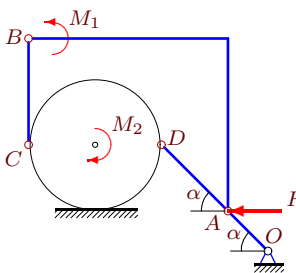
11



$M_1 = 819, M_2 = 497, R = 4, OA = 4,$
 $AD = 4\sqrt{2}, BC = 7, \alpha = 45^\circ.$

Задача 34.14.

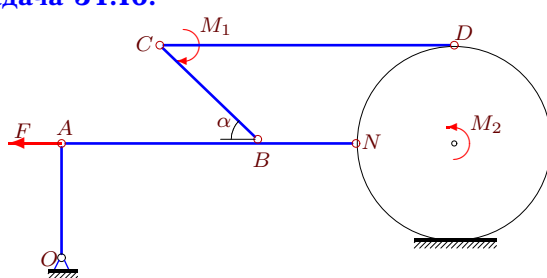
11



$M_1 = 300, M_2 = 244, R = 5, OA = 3\sqrt{2},$
 $AD = 5\sqrt{2}, BC = 8, \alpha = 45^\circ.$

Задача 34.16.

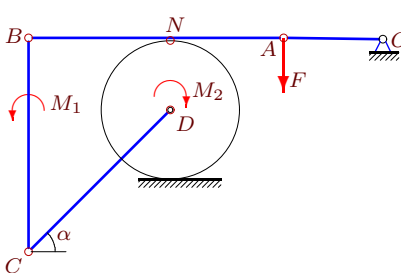
11



$M_1 = 1449, M_2 = 1855, R = 6, OA = 7,$
 $AB = 12, BN = 6, BC = 6\sqrt{2}, CD = 18, \alpha = 45^\circ$

Задача 34.18.

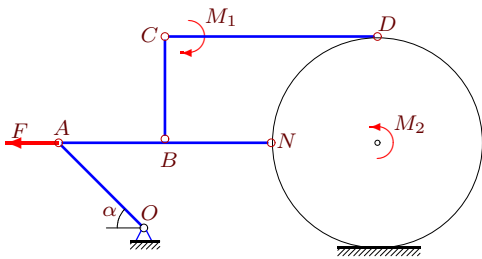
11



$M_1 = 336, M_2 = 518, R = 5, OA = 7,$
 $CD = 10\sqrt{2}, AN = 8, AB = 18, \alpha = 45^\circ.$

Задача 34.19.

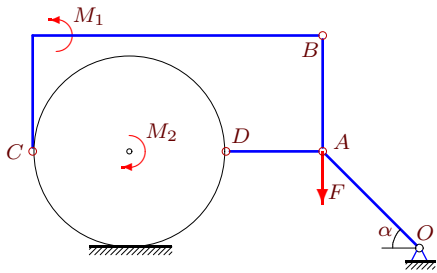
11



$M_1 = 36, M_2 = 78, R = 5, OA = 4\sqrt{2},$
 $AB = 5, BN = BC = 5, CD = 10, \alpha = 45^\circ$

Задача 34.21.

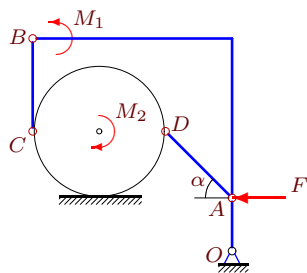
11



$M_1 = 19, M_2 = 20, R = 5, OA = 5\sqrt{2},$
 $AB = 6, AD = 5, \alpha = 45^\circ.$

Задача 34.23.

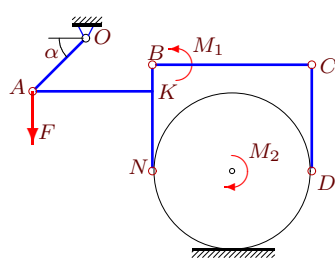
11



$M_1 = 378, M_2 = 406, R = 5, OA = 4,$
 $AD = 5\sqrt{2}, BC = 7, \alpha = 45^\circ.$

Задача 34.25.

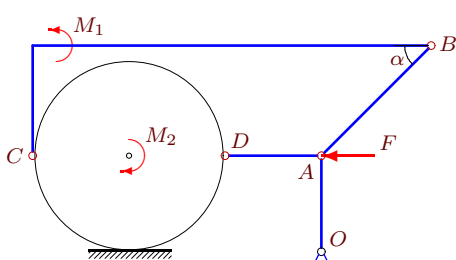
11



$M_1 = 46, M_2 = 82, R = 6, OA = 4\sqrt{2},$
 $AK = 9, BK = 2, KN = 6, CD = 8, \alpha = 45^\circ.$

Задача 34.27.

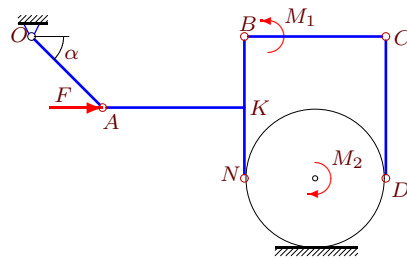
11



$M_1 = 60, M_2 = 125, R = 7, OA = 7,$
 $AB = 8\sqrt{2}, AD = 7, \alpha = 45^\circ.$

Задача 34.20.

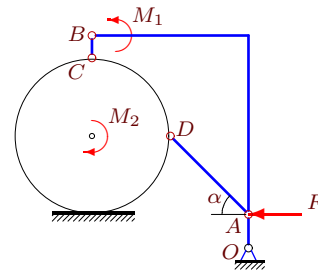
11



$M_1 = 13, M_2 = 10, R = 3, OA = 3\sqrt{2},$
 $AK = 6, BK = 3, KN = 3, CD = 6, \alpha = 45^\circ.$

Задача 34.22.

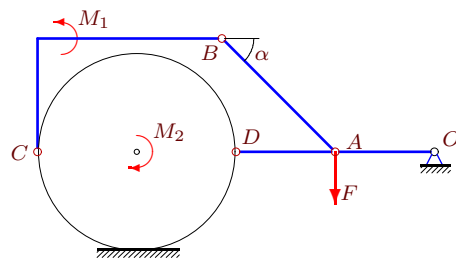
11



$M_1 = 81, M_2 = 252, R = 7, OA = 3,$
 $AD = 7\sqrt{2}, BC = 2, \alpha = 45^\circ.$

Задача 34.24.

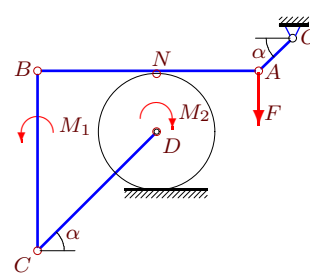
11



$M_1 = 105, M_2 = 127, R = 7, OA = 7,$
 $AB = 8\sqrt{2}, AD = 7, \alpha = 45^\circ.$

Задача 34.26.

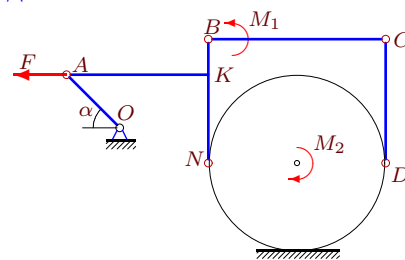
11



$M_1 = 522, M_2 = 524, R = 7, OA = 4\sqrt{2},$
 $CD = 14\sqrt{2}, AN = 12, AB = 26, \alpha = 45^\circ.$

Задача 34.28.

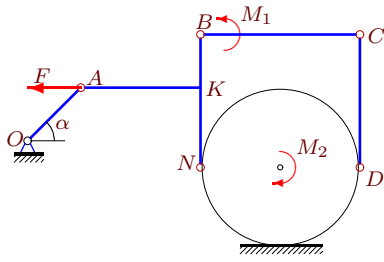
11



$M_1 = M_2 = 72, R = 5, OA = 3\sqrt{2},$
 $AK = 8, BK = 2, KN = 5, CD = 7, \alpha = 45^\circ.$

Задача 34.29.

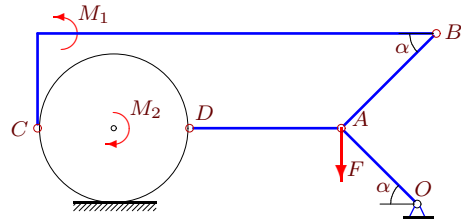
11



$M_1 = 50, M_2 = 62, R = 6, OA = 4\sqrt{2},$
 $AK = 9, BK = 4, KN = 6, CD = 10, \alpha = 45^\circ.$

Задача 34.30.

11



$M_1 = 15, M_2 = 12, R = 4, OA = 4\sqrt{2},$
 $AB = 5\sqrt{2}, AD = 8, \alpha = 45^\circ.$

Принцип возможных перемещений (2)

№	ω_{AB_z}	ω_{BC_z}	ω_{CD_z}	ω_{DA_z}	$\omega_{\text{диск}_z}$	ω_{OA_z}	F
1	-4	-4	-11	—	3	8	48
2	1	-1	0	—	-1	1	5
3	-8	10	-44	—	10	3	20
4	-8	10	-35	—	10	6	20
5	24	-33	100	—	-33	18	-66
6	0	0	—	-1	1	2	4
7	1	-1	1	—	-1	1	11
8	-3	-2	-3	—	0	3	24
9	-3	2	—	-9	0	9	12
10	-3	0	-1	—	0	9	-2
11	-5	-5	—	-5	-5	8	-5
12	7	23	—	-21	21	42	28
13	-3	-2	-3	—	0	3	24
14	-4	1	—	-12	0	20	20
15	1	1	—	1	1	2	0
16	-21	63	35	—	63	54	-175
17	-15	-7	-15	—	9	15	39
18	-21	-14	-21	—	0	24	28
19	0	4	2	—	4	5	-12
20	0	-1	0	—	-1	1	1
21	0	0	—	-2	1	1	4
22	0	0	—	-3	3	14	18
23	14	54	—	-42	42	105	28
24	-1	-1	—	-3	0	3	5
25	8	-10	8	—	-10	3	-30
26	-21	-20	-21	—	-18	63	4
27	1	1	—	-3	3	3	15
28	0	3	0	—	3	5	0
29	-8	10	-8	—	10	3	10
30	0	0	—	-1	1	1	3