

Кинематический анализ плоского механизма

В указанном положении механизма задана угловая скорость одного из звеньев. Длины звеньев даны в сантиметрах. Стержни, направление которых не указано, считать горизонтальными или вертикальными. Диск катится по горизонтальной поверхности без проскальзывания. Найти угловые скорости всех звеньев механизма.

Кирсанов М.Н. **Решебник. Теоретическая механика**/Под ред. А. И. Кириллова.– М.:ФИЗМАТЛИТ, 2008.– 384 с. (с.158.)

Задача 26.1. 48

$\omega_{OA_z} = 1 \frac{1}{c}$, $R = 4$, $OA = 4\sqrt{2}$,
 $AK = 7$, $BK = 4$, $KN = 4$, $CD = 8$, $\alpha = 45^\circ$.

Задача 26.2. 48

$\omega_{OA_z} = 42 \frac{1}{c}$, $R = 7$, $OA = 5$,
 $AD = 7\sqrt{2}$, $BC = 10$, $\alpha = 45^\circ$.

Задача 26.3. 48

$\omega_{OA_z} = 4 \frac{1}{c}$, $R = 4$, $OA = 4$,
 $AB = 5\sqrt{2}$, $AD = 8$, $\alpha = 45^\circ$.

Задача 26.4. 48

$\omega_{OA_z} = 5 \frac{1}{c}$, $R = 5$, $OA = 7\sqrt{2}$,
 $AB = 5$, $BN = 5$, $BC = 5\sqrt{2}$, $CD = 5$, $\alpha = 45^\circ$

Задача 26.5. 48

$\omega_{OA_z} = 1 \frac{1}{c}$, $R = 3$, $OA = 3$,
 $AK = 6$, $BK = 2$, $KN = 3$, $CD = 5$.

Задача 26.6. 48

$\omega_{OA_z} = 1 \frac{1}{c}$, $R = 3$, $OA = 3\sqrt{2}$,
 $AK = 6$, $BK = 4$, $KN = 3$, $CD = 7$, $\alpha = 45^\circ$.

Задача 26.7. 48

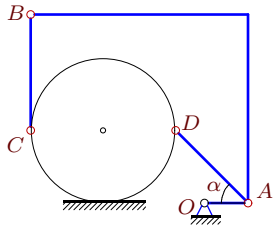
$\omega_{OA_z} = 3 \frac{1}{c}$, $R = 7$, $OA = 7$,
 $AB = 8\sqrt{2}$, $AD = 7$, $\alpha = 45^\circ$.

Задача 26.8. 48

$\omega_{OA_z} = 3 \frac{1}{c}$, $R = 6$, $OA = 6$,
 $AB = 7\sqrt{2}$, $AD = 6$, $\alpha = 45^\circ$.

Задача 26.9.

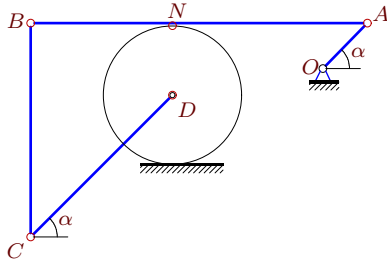
48



$\omega_{OA_z} = 10\frac{1}{c}$, $R = 5$, $OA = 3$,
 $AD = 5\sqrt{2}$, $BC = 8$, $\alpha = 45^\circ$.

Задача 26.11.

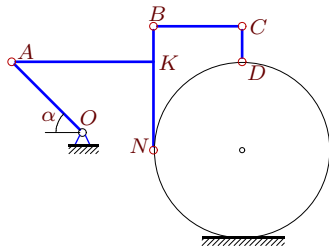
48



$\omega_{OA_z} = 176\frac{1}{c}$, $R = 8$, $OA = 5\sqrt{2}$,
 $CD = 16\sqrt{2}$, $AN = 22$, $AB = 38$, $\alpha = 45^\circ$.

Задача 26.13.

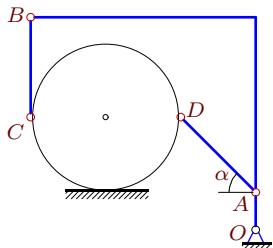
48



$\omega_{OA_z} = 5\frac{1}{c}$, $R = 5$, $OA = 4\sqrt{2}$,
 $AK = 8$, $BK = 2$, $KN = 5$, $CD = 2$, $\alpha = 45^\circ$.

Задача 26.15.

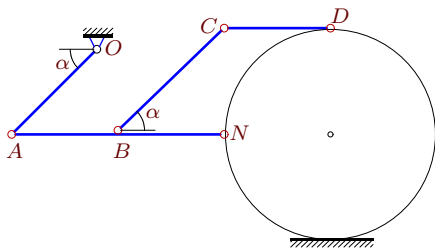
48



$\omega_{OA_z} = 12\frac{1}{c}$, $R = 6$, $OA = 3$,
 $AD = 6\sqrt{2}$, $BC = 8$, $\alpha = 45^\circ$.

Задача 26.17.

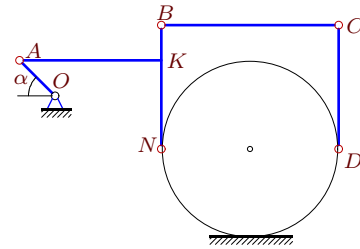
48



$\omega_{OA_z} = 5\frac{1}{c}$, $R = 5$, $OA = 4\sqrt{2}$,
 $AB = 5$, $BN = 5$, $BC = 5\sqrt{2}$, $CD = 5$, $\alpha = 45^\circ$

Задача 26.10.

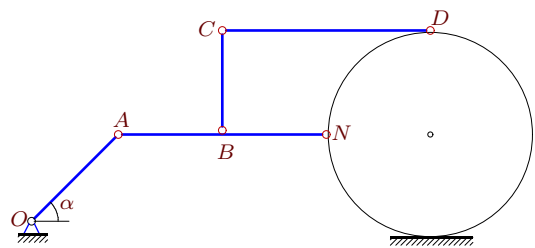
48



$\omega_{OA_z} = 5\frac{1}{c}$, $R = 5$, $OA = 2\sqrt{2}$,
 $AK = 8$, $BK = 2$, $KN = 5$, $CD = 7$, $\alpha = 45^\circ$.

Задача 26.12.

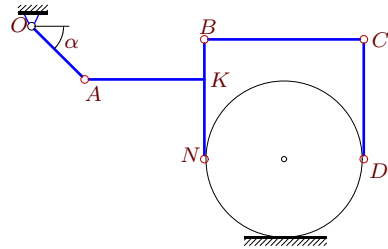
48



$\omega_{OA_z} = 6\frac{1}{c}$, $R = 6$, $OA = 5\sqrt{2}$,
 $AB = 6$, $BN = BC = 6$, $CD = 12$, $\alpha = 45^\circ$

Задача 26.14.

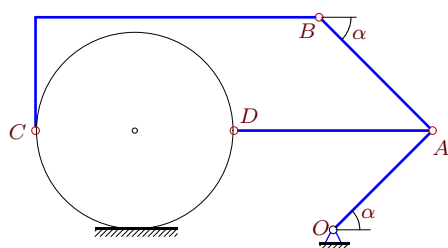
48



$\omega_{OA_z} = 3\frac{1}{c}$, $R = 6$, $OA = 4\sqrt{2}$,
 $AK = 9$, $BK = 3$, $KN = 6$, $CD = 9$, $\alpha = 45^\circ$.

Задача 26.16.

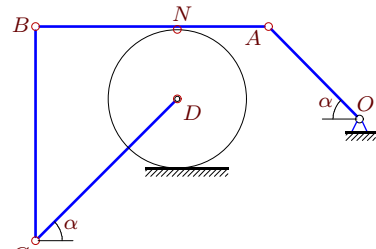
48



$\omega_{OA_z} = 2\frac{1}{c}$, $R = 7$, $OA = 7\sqrt{2}$,
 $AB = 8\sqrt{2}$, $AD = 14$, $\alpha = 45^\circ$.

Задача 26.18.

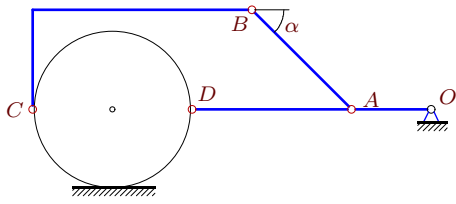
48



$\omega_{OA_z} = 42\frac{1}{c}$, $R = 7$, $OA = 9\sqrt{2}$,
 $CD = 14\sqrt{2}$, $AN = 9$, $AB = 23$, $\alpha = 45^\circ$.

Задача 26.19.

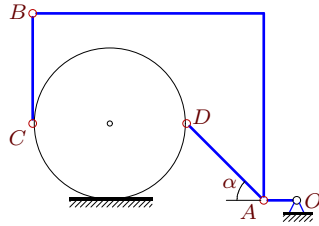
48



$\omega_{OA_z} = 4\frac{1}{c}$, $R = 4$, $OA = 4$,
 $AB = 5\sqrt{2}$, $AD = 8$, $\alpha = 45^\circ$.

Задача 26.21.

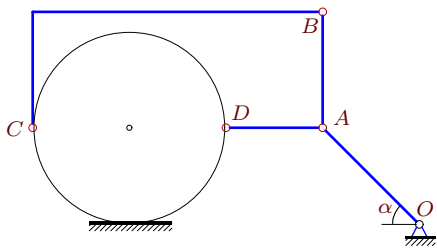
48



$\omega_{OA_z} = 14\frac{1}{c}$, $R = 7$, $OA = 3$,
 $AD = 7\sqrt{2}$, $BC = 10$, $\alpha = 45^\circ$.

Задача 26.23.

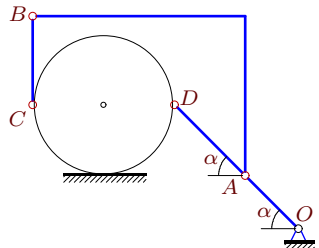
48



$\omega_{OA_z} = 1\frac{1}{c}$, $R = 5$, $OA = 5\sqrt{2}$,
 $AB = 6$, $AD = 5$, $\alpha = 45^\circ$.

Задача 26.25.

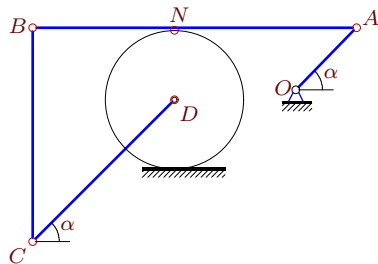
48



$\omega_{OA_z} = 20\frac{1}{c}$, $R = 4$, $OA = 3\sqrt{2}$,
 $AD = 4\sqrt{2}$, $BC = 5$, $\alpha = 45^\circ$.

Задача 26.27.

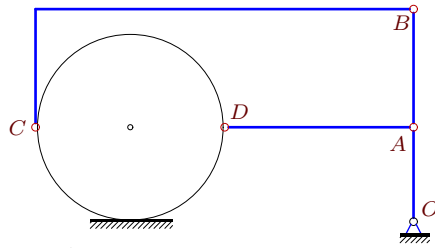
48



$\omega_{OA_z} = 63\frac{1}{c}$, $R = 7$, $OA = 6\sqrt{2}$,
 $CD = 14\sqrt{2}$, $AN = 18$, $AB = 32$, $\alpha = 45^\circ$.

Задача 26.20.

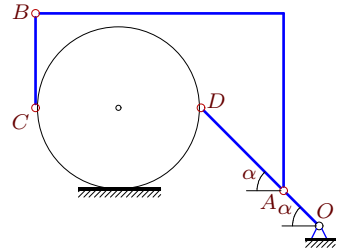
48



$\omega_{OA_z} = 4\frac{1}{c}$, $R = 4$, $OA = 4$,
 $AB = 5$, $AD = 8$.

Задача 26.22.

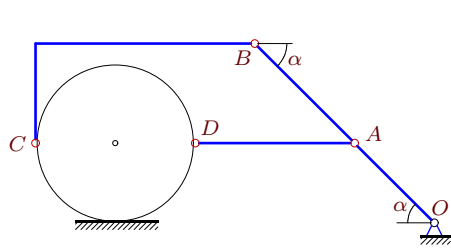
48



$\omega_{OA_z} = 28\frac{1}{c}$, $R = 7$, $OA = 3\sqrt{2}$,
 $AD = 7\sqrt{2}$, $BC = 8$, $\alpha = 45^\circ$.

Задача 26.24.

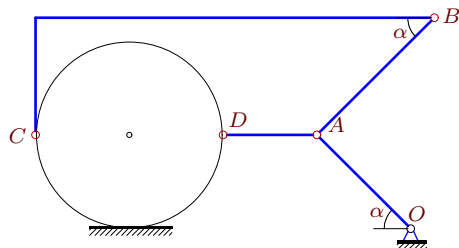
48



$\omega_{OA_z} = 1\frac{1}{c}$, $R = 4$, $OA = 4\sqrt{2}$,
 $AB = 5\sqrt{2}$, $AD = 8$, $\alpha = 45^\circ$.

Задача 26.26.

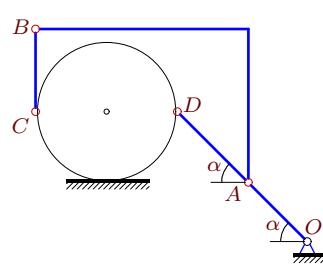
48



$\omega_{OA_z} = 1\frac{1}{c}$, $R = 4$, $OA = 4\sqrt{2}$,
 $AB = 5\sqrt{2}$, $AD = 4$, $\alpha = 45^\circ$.

Задача 26.28.

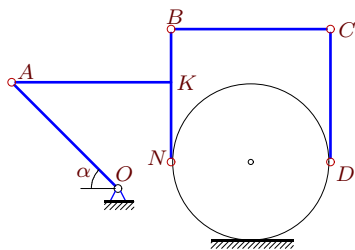
48



$\omega_{OA_z} = 126\frac{1}{c}$, $R = 6$, $OA = 5\sqrt{2}$,
 $AD = 6\sqrt{2}$, $BC = 7$, $\alpha = 45^\circ$.

Задача 26.29.

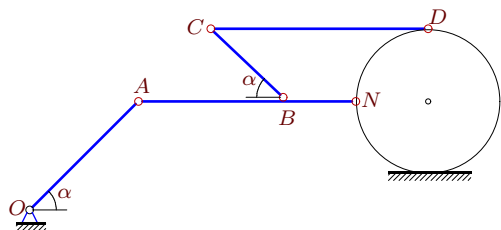
48



$\omega_{OA_z} = 3\frac{1}{c}$, $R = 3$, $OA = 4\sqrt{2}$,
 $AK = 6$, $BK = 2$, $KN = 3$, $CD = 5$, $\alpha = 45^\circ$.

Задача 26.31.

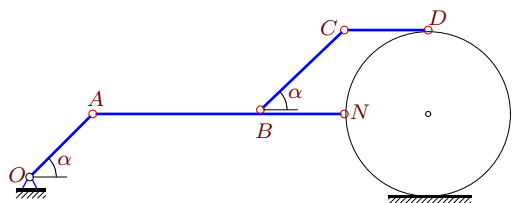
48



$\omega_{OA_z} = 6\frac{1}{c}$, $R = 4$, $OA = 6\sqrt{2}$,
 $AB = 8$, $BN = 4$, $BC = 4\sqrt{2}$, $CD = 12$, $\alpha = 45^\circ$

Задача 26.33.

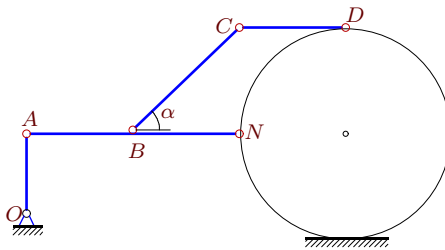
48



$\omega_{OA_z} = 4\frac{1}{c}$, $R = 4$, $OA = 3\sqrt{2}$,
 $AB = 8$, $BN = 4$, $BC = 4\sqrt{2}$, $CD = 4$, $\alpha = 45^\circ$

Задача 26.30.

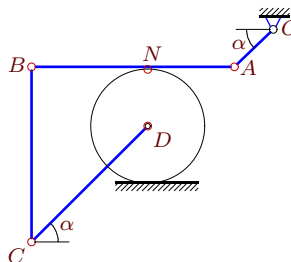
48



$\omega_{OA_z} = 8\frac{1}{c}$, $R = 4$, $OA = 3$,
 $AB = 4$, $BN = 4$, $BC = 4\sqrt{2}$, $CD = 4$, $\alpha = 45^\circ$

Задача 26.32.

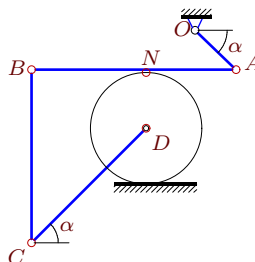
48



$\omega_{OA_z} = 27\frac{1}{c}$, $R = 6$, $OA = 4\sqrt{2}$,
 $CD = 12\sqrt{2}$, $AN = 9$, $AB = 21$, $\alpha = 45^\circ$.

Задача 26.34.

48



$\omega_{OA_z} = 462\frac{1}{c}$, $R = 7$, $OA = 5\sqrt{2}$,
 $CD = 14\sqrt{2}$, $AN = 11$, $AB = 25$, $\alpha = 45^\circ$.

Кинематический анализ плоского механизма

№	ω_{AB_z}	ω_{BC_z}	ω_{CD_z}	ω_{DA_z}	$\omega_{диск_z}$
1	0	1	0	—	1
2	5	19	—	-15	15
3	1	1	—	-2	4
4	7	-7	7	—	-7
5	-1	1	-1	—	1
6	0	-1	0	—	-1
7	1	1	—	-3	3
8	-1	-1	—	-3	0
9	3	3	—	3	3
10	0	2	0	—	2
11	40	45	40	—	55
12	-5	5	0	—	5
13	0	4	-10	—	4
14	0	-2	0	—	-2
15	1	4	—	-3	3
16	1	1	—	0	2
17	4	-4	4	—	-4
18	-42	-19	-42	—	27
19	-1	-1	—	-2	0
20	1	1	—	-2	4
21	-3	-3	—	-3	-3
22	-4	3	—	-12	0
23	0	0	—	-2	1
24	0	0	—	-1	1
25	-5	3	—	-15	0
26	0	0	—	-2	1
27	21	23	21	—	27
28	-35	25	—	-105	0
29	0	4	0	—	4
30	-3	6	-3	—	6
31	-6	9	4	—	9
32	-12	-11	-12	—	-9
33	-2	3	-2	—	3
34	210	85	210	—	-165