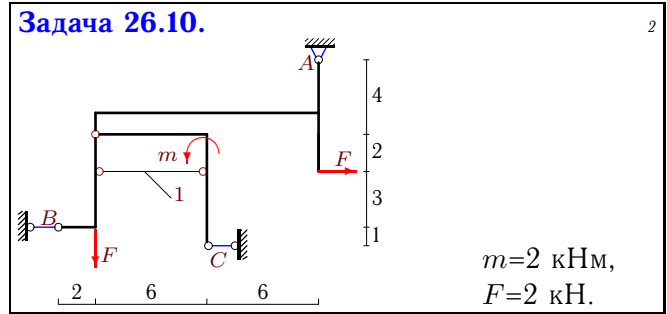
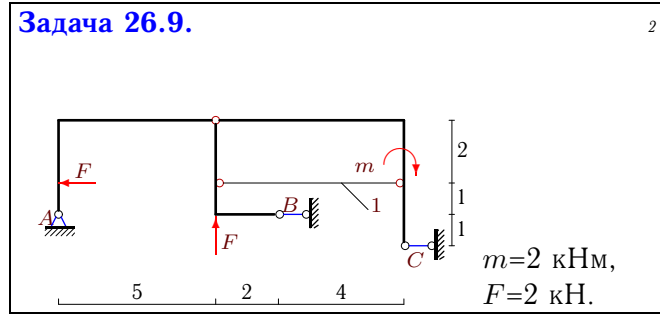
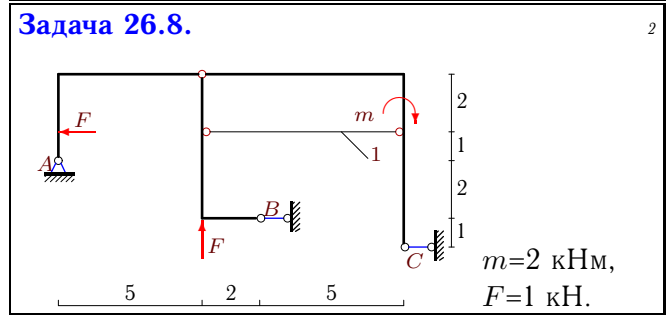
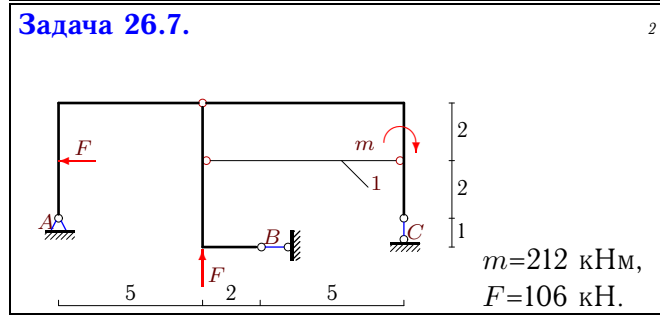
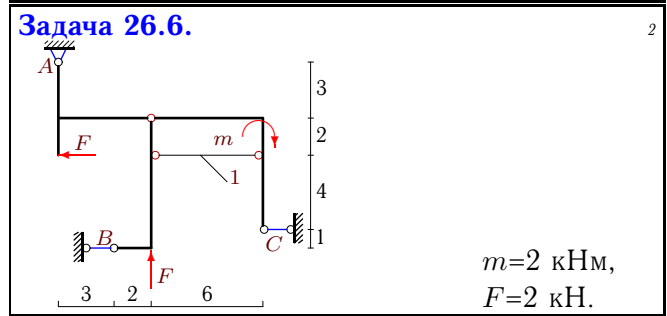
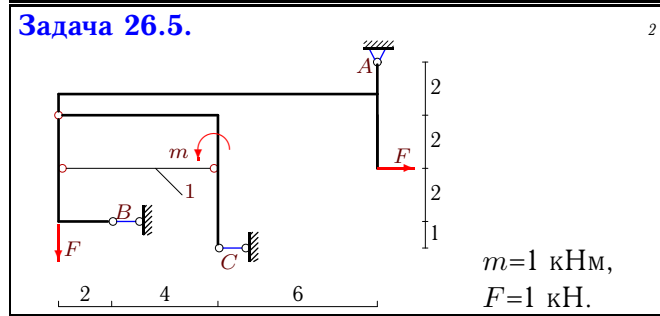
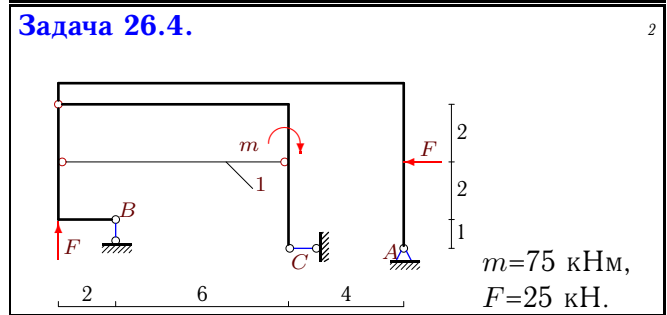
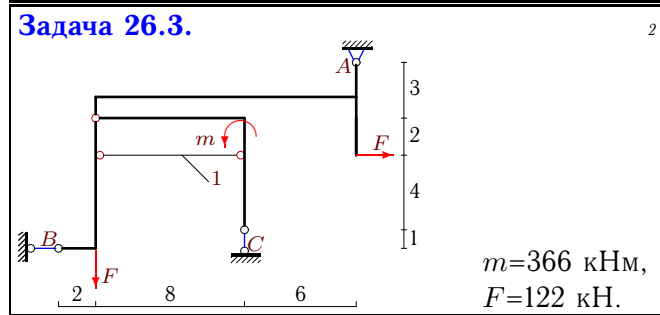
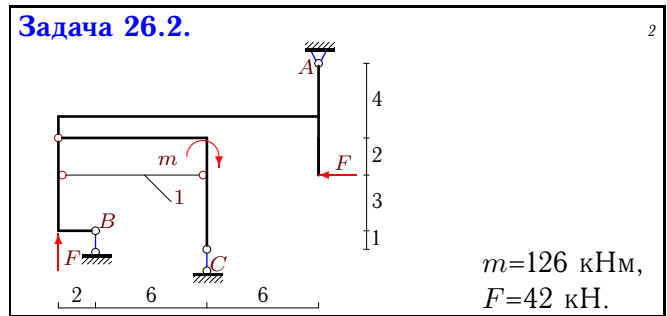
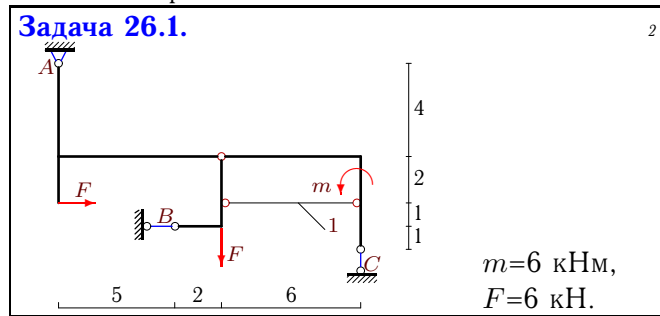


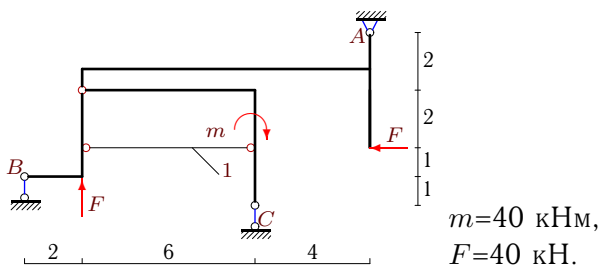
Простая составная конструкция из трех тел

Найти реакции опор и усилие в стержне 1 составной конструкции. Размеры даны в метрах.



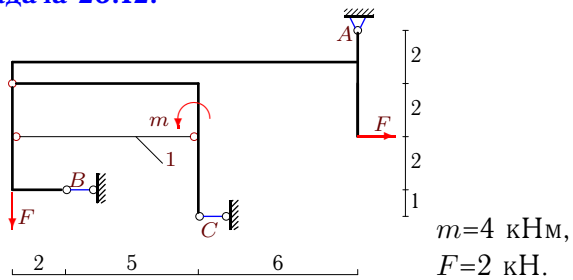
Задача 26.11.

2



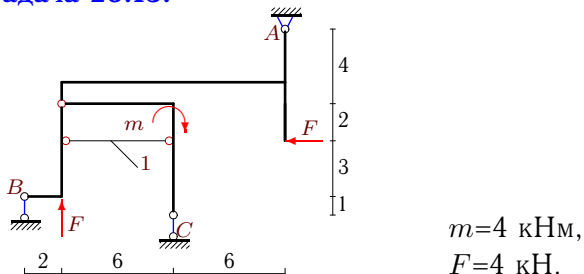
Задача 26.12.

2



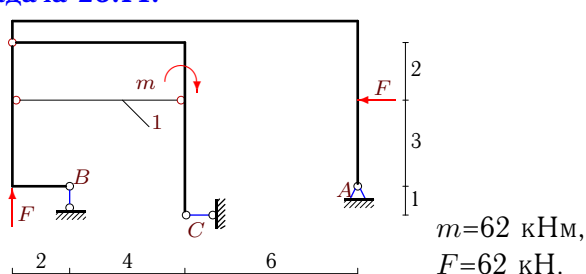
Задача 26.13.

2



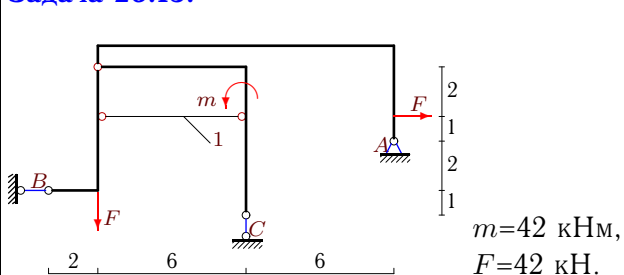
Задача 26.14.

2



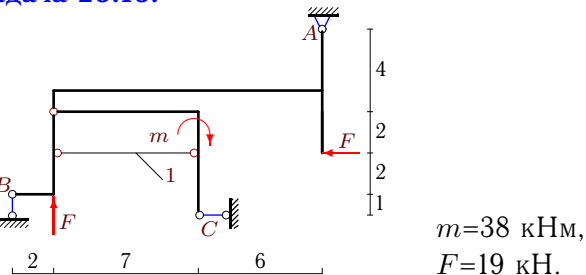
Задача 26.15.

2



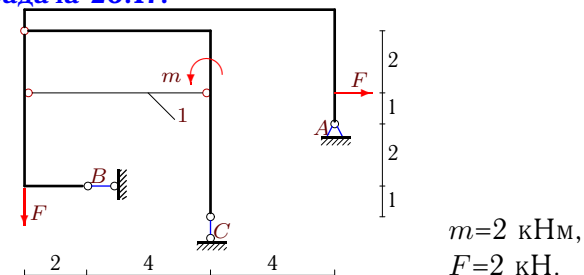
Задача 26.16.

2



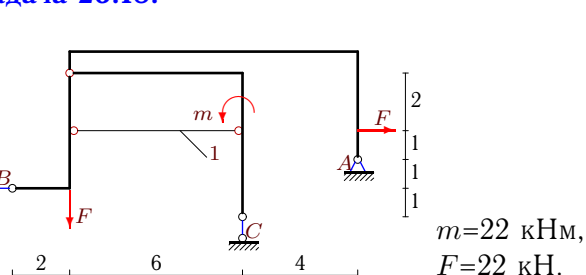
Задача 26.17.

2



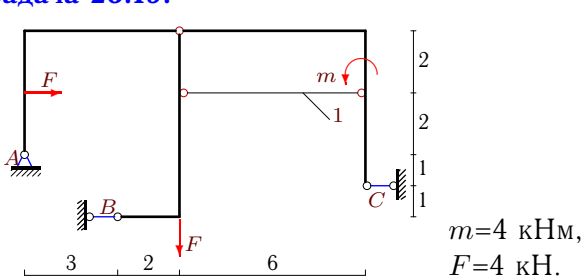
Задача 26.18.

2



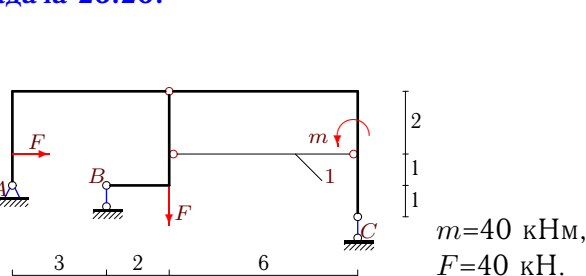
Задача 26.19.

2



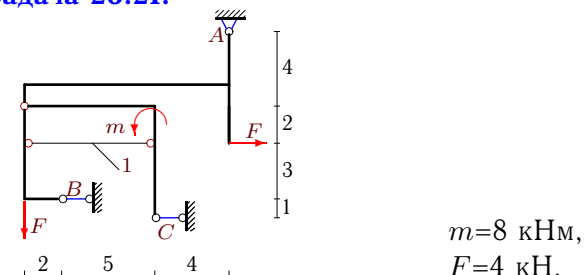
Задача 26.20.

2



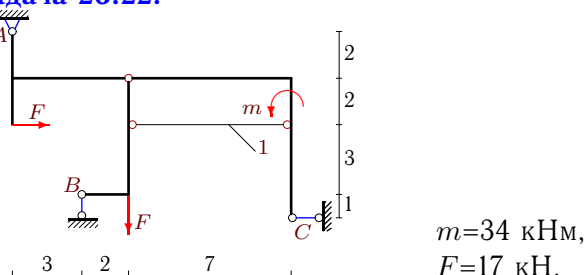
Задача 26.21.

2



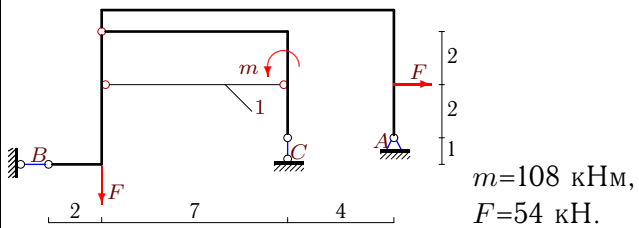
Задача 26.22.

2



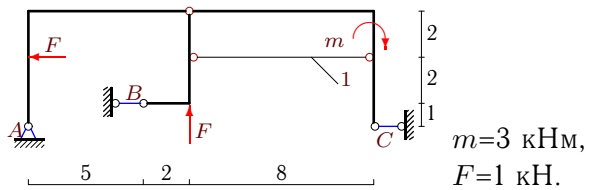
Задача 26.23.

2



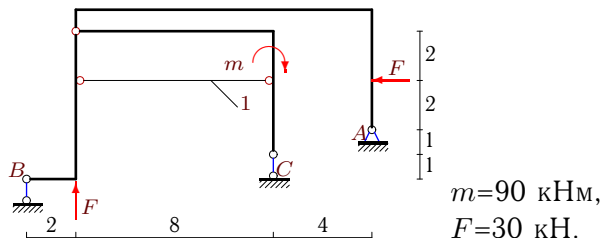
Задача 26.24.

2



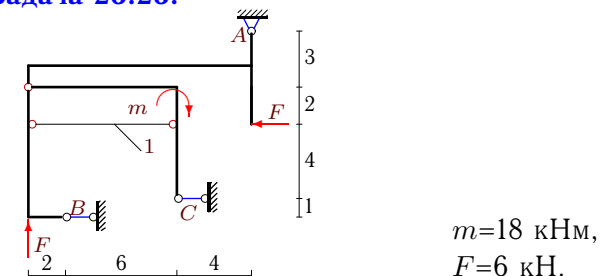
Задача 26.25.

2



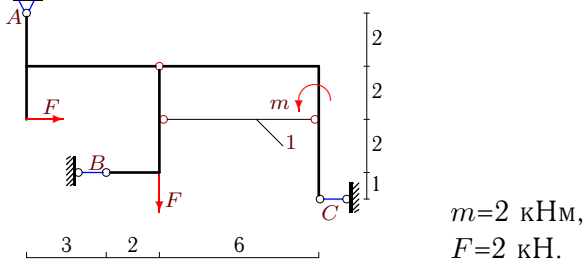
Задача 26.26.

2



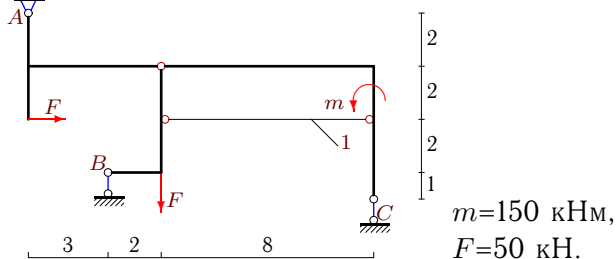
Задача 26.27.

2



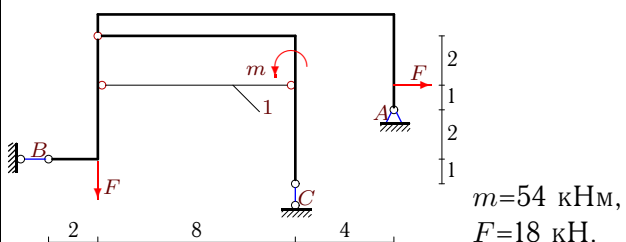
Задача 26.28.

2



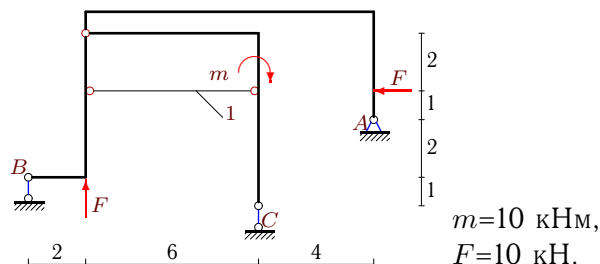
Задача 26.29.

2



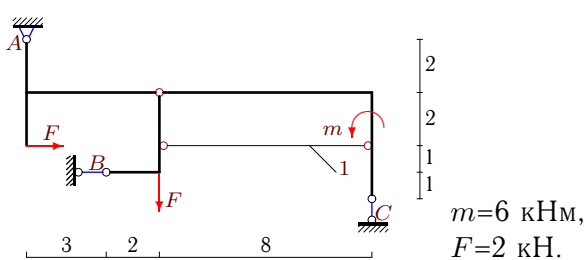
Задача 26.30.

2



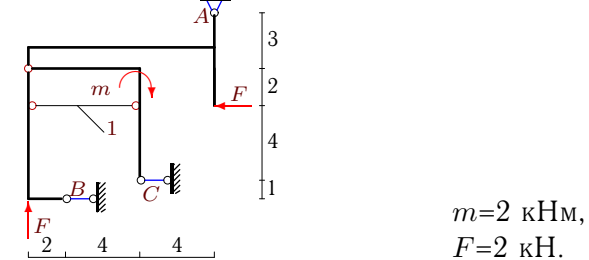
Задача 26.31.

2



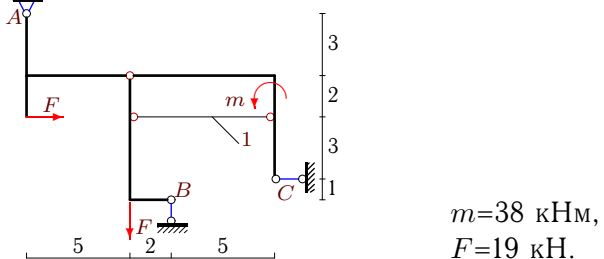
Задача 26.32.

2



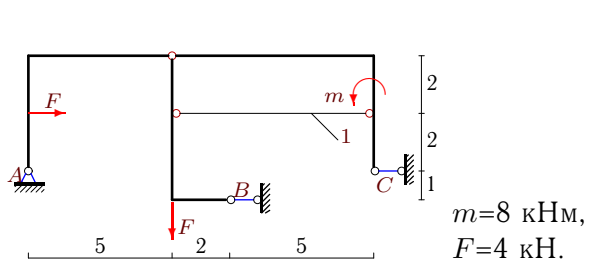
Задача 26.33.

2



Задача 26.34.

2



Простая составная конструкция из трех тел

№	X_A	Y_A	R_B	R_C	S
1	-32	20	26	-14	-39
2	42	18	-101	41	101
3	72	-2	-194	124	679
4	-2	5	-30	27	30
5	7	1	-39	31	78
6	2	-2	2	-2	-7
7	-12	-52	118	-54	-295
8	-1	-1	10	-8	-25
9	-2	-2	14	-10	-21
10	7	2	-52	43	130
11	40	16	-47	-9	-47
12	15	2	-81	64	162
13	4	2	-5	-1	-5
14	32	-3	-59	30	59
15	36	-16	-78	58	195
16	23	10	-29	-4	-29
17	2	-1	-4	3	10
18	42	-17	-64	39	128
19	3	4	31	-38	-93
20	-40	-8	41	7	41
21	13	4	-94	77	235
22	-13	12	5	-4	5
23	116	-52	-170	106	425
24	-1	-1	7	-5	-14
25	30	-5	-29	4	-29
26	-28	-6	-186	220	651
27	-3	2	7	-6	-14
28	-50	40	23	-13	23
29	44	-14	-62	32	155
30	10	-1	-8	-1	-8
31	-48	20	46	-18	-69
32	-8	-2	-58	68	203
33	-9	13	6	-10	-6
34	3	4	20	-27	-50